

Name: \_\_\_\_\_

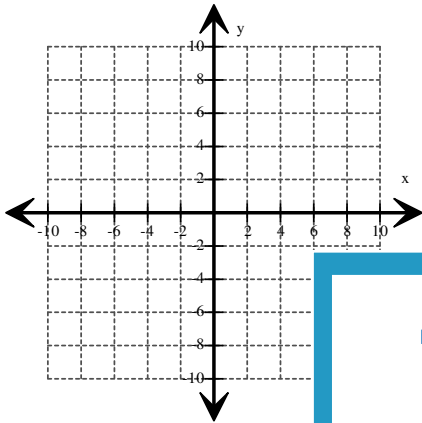
Score: \_\_\_\_\_

**Draw the Graph**

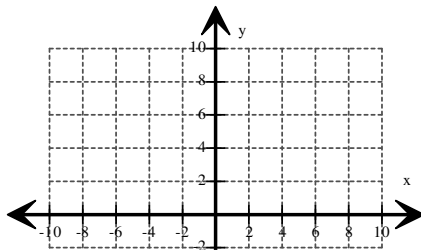
ES2

Draw the graph of each absolute value function .

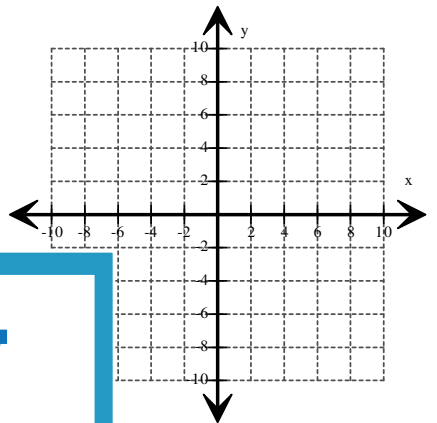
1)  $f(x) = |x| + 1$



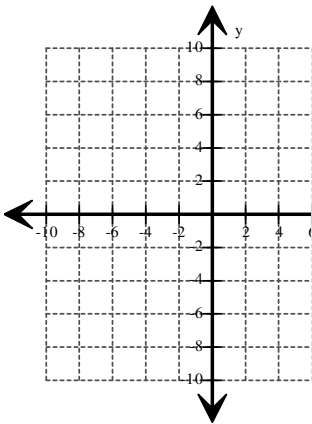
2)  $f(x) = |x| - 6$



3)  $f(x) = |x + 2|$



4)  $f(x) = |x - 2|$



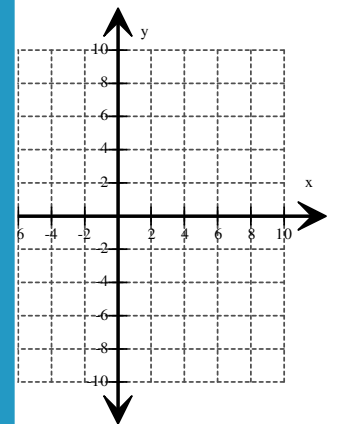
**PREVIEW**  
Gain complete access to the largest collection of worksheets in all subjects!

Members, please log in to download this worksheet.

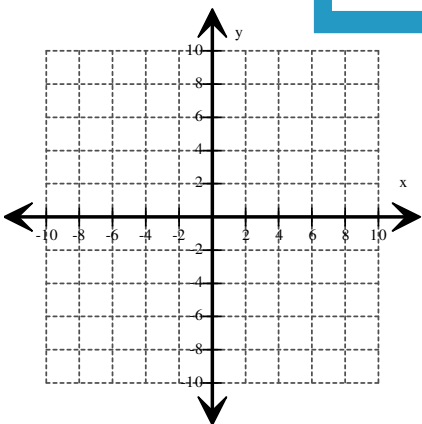
Not a member? Please sign up to gain complete access.

[www.mathworksheets4kids.com](http://www.mathworksheets4kids.com)

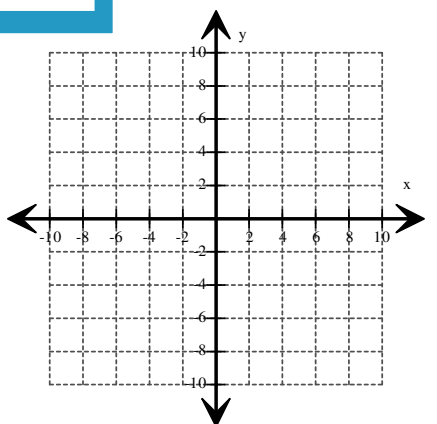
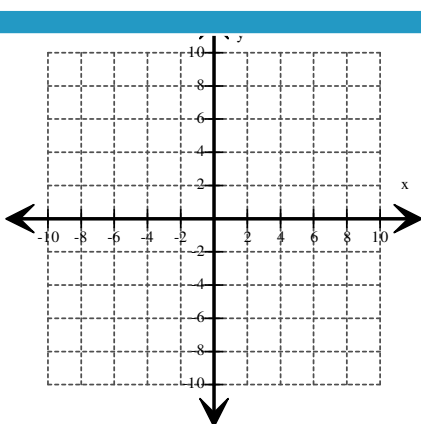
5)  $f(x) = |x| - 3$



6)  $f(x) = |x| - 5$



7)  $f(x) = |x - 3|$



Name: \_\_\_\_\_

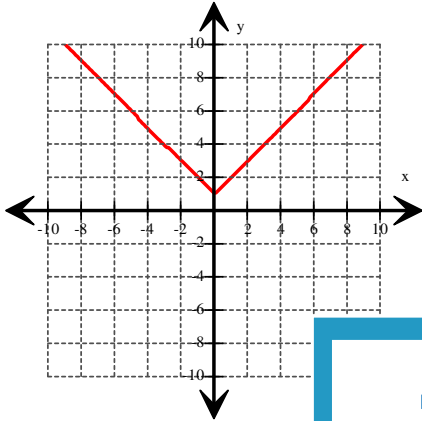
Score: \_\_\_\_\_

**Draw the Graph**

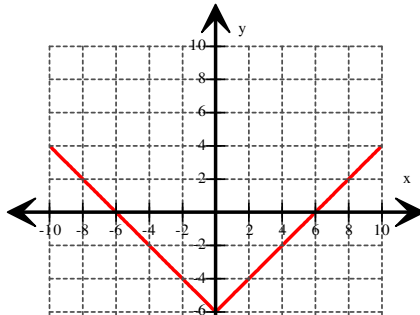
ES2

Answers:

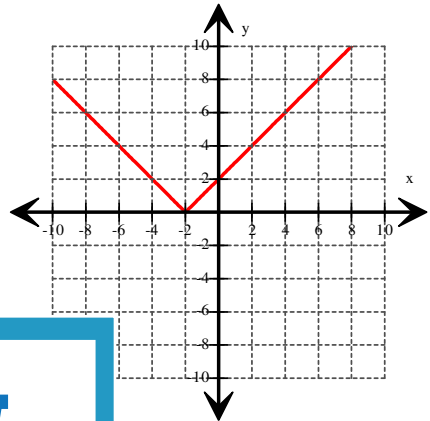
1)  $f(x) = |x| + 1$



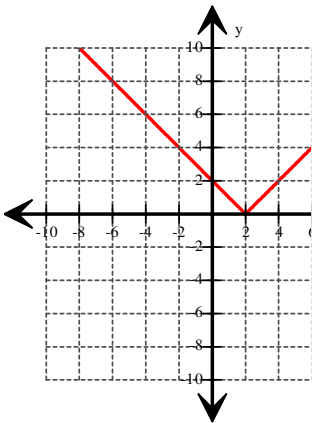
2)  $f(x) = |x| - 6$



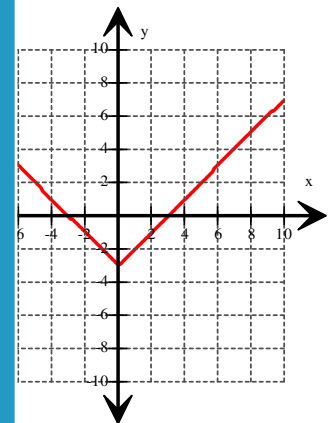
3)  $f(x) = |x + 2|$



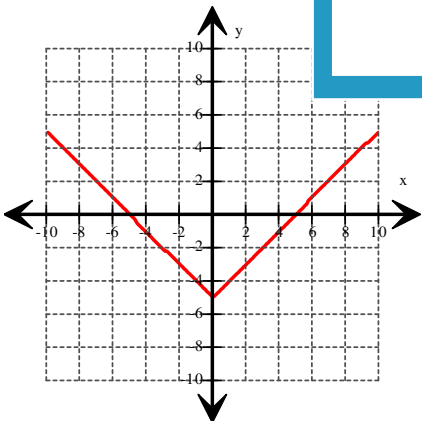
4)  $f(x) = |x - 2|$



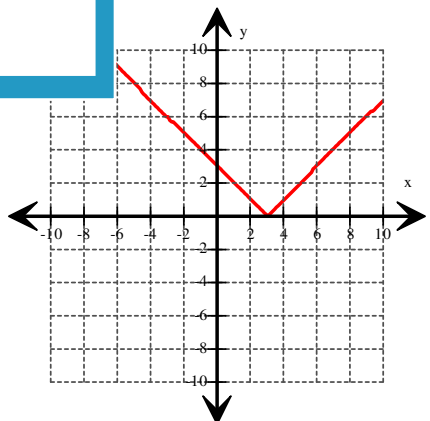
5)  $f(x) = |x| - 3$



6)  $f(x) = |x| - 5$



7)  $f(x) = |x - 3|$



**PREVIEW**

Gain complete access to the largest collection of worksheets in all subjects!

Members, please log in to download this worksheet.

Not a member? Please sign up to gain complete access.

[www.mathworksheets4kids.com](http://www.mathworksheets4kids.com)