


Addition and Subtraction


Count the pictures in each set and write the addition or subtraction sentence.

1)




= _____

2)



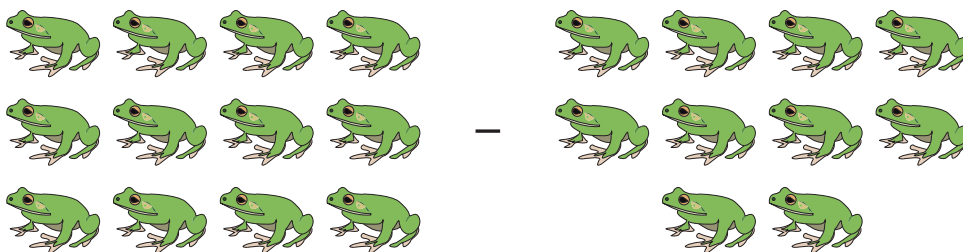
= _____

3)



= _____

4)



= _____

PREVIEW

Gain complete access to the largest collection of worksheets in all subjects!

Members, please log in to download this worksheet.

Not a member? Please sign up to gain complete access.

www.mathworksheets4kids.com