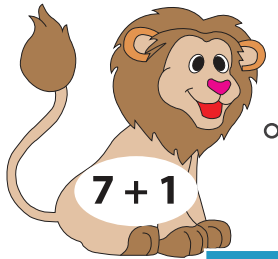




Addition and Subtraction

Match the addition sentence on the left to the equivalent subtraction sentence on the right.


1)





2)




3)



4)



5)



PREVIEW

Gain complete access to the largest collection of worksheets in all subjects!

Members, please log in to download this worksheet.

Not a member? Please sign up to gain complete access.

www.mathworksheets4kids.com