

Name : \_\_\_\_\_

Within 10: 53

## Addition and Subtraction

Count the pictures in each set and write the addition or subtraction sentence.

1)

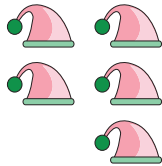


-

=

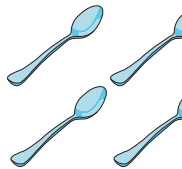
\_\_\_\_\_

2)



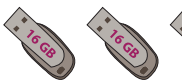
\_\_\_\_\_

3)




\_\_\_\_\_

4)



\_\_\_\_\_

5)



\_\_\_\_\_

**PREVIEW**

Gain complete access to the largest collection of worksheets in all subjects!

Members, please log in to download this worksheet.

Not a member? Please sign up to gain complete access.

[www.mathworksheets4kids.com](http://www.mathworksheets4kids.com)