



Addition & Subtraction within 10

- 1) There are 8 rungs on a ladder. If the top 2 rungs are broken, how many rungs are in good condition?



- 2) Brad learned 2 new words from the dictionary in the morning and 1 new word at bedtime. How many new words did Brad learn today?



- 3) There were 7 pair of shoes in a box. How many shoes were there? A doctor bought 3

Gain complete access to the largest collection of worksheets in all subjects!

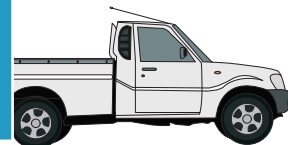
Members, please log in to download this worksheet.

Not a member? Please sign up to gain complete access.



- 4) While walking he saw 5 cars. How many more cars than pickup trucks. How

www.mathworksheets4kids.com



- 5) Fiona collected 3 plastic bottles and 3 plastic jars. How many plastic bottles and jars did she collect in all?