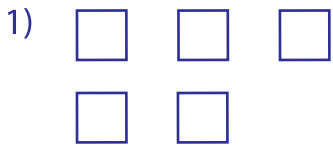


Name : _____

Score : _____

Addition Activity

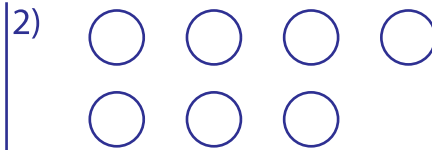
Sums up to 10: S1



Color 2 squares red and the rest green.

How many squares are there? _____


_____ red + _____ green = _____ squares



Color 6 circles yellow and the rest blue.

How many circles are there? _____

_____ yellow + _____ blue = _____ circles



Color 5 stars pink and the rest orange.

How many stars are there? _____


_____ pink + _____ orange = _____ stars



Color one rectangle blue and the rest green.

How many rectangles are there? _____

_____ blue + _____ green = _____ rectangles



Color 4 hearts pink and the rest brown.

How many hearts are there? _____

_____ pink + _____ brown = _____ hearts



Color 2 hexagons red and the rest violet.

How many hexagons are there? _____

_____ red + _____ violet = _____ hexagons

PREVIEW

Gain complete access to the largest collection of worksheets in all subjects!

Members, please log in to download this worksheet.

Not a member? Please sign up to gain complete access.

www.mathworksheets4kids.com

_____ violet and the other

_____ are there? _____

_____ brown = _____ pentagons



Color one kite yellow and the rest yellow.

How many kites are there? _____

_____ yellow = _____ kites