


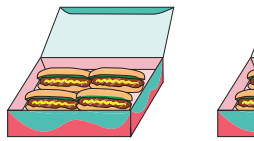
# Picture Addition

1) There are 3 books on each table. How many books are there altogether?



\_\_\_\_\_ books

2) There are 4 hot dogs in a box. How many hot dogs are in total?



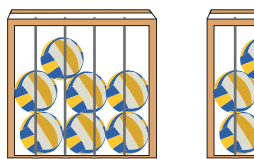
\_\_\_\_\_ hot dogs

3) Each plate has 2



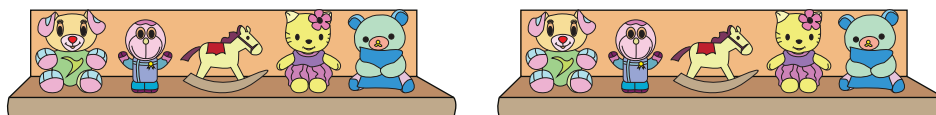
\_\_\_\_\_ pieces of cake

4) There are 7 balls



\_\_\_\_\_ balls

5) A shelf has 5 toys. How many toys are there altogether?



\_\_\_\_\_ toys

## PREVIEW

Gain complete access to the largest collection of worksheets in all subjects!

Members, please log in to download this worksheet.

Not a member? Please sign up to gain complete access.

[www.mathworksheets4kids.com](http://www.mathworksheets4kids.com)

together?

together?