


Name : _____


Three-Digit Addition

Sheet 1

- 1) Viola, a candle maker, produces 200 pillar candles and 250 rolled candles in seven days. How many candles in all does Viola make in a week?



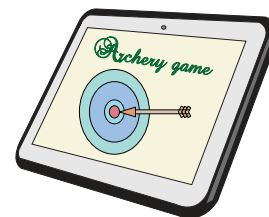
- 2) A botanical garden houses 360 Juniper bonsais and 150 Ficus bonsais. How many bonsais in all are there in the garden?



- 3) In an online archery game, Alice won 450 points. How many points did her sister, Janet, win?

Gain complete access to the largest collection of worksheets in all subjects!

Her sister, Janet, won 635




- 4) An animal farm has 120 goats and 80 sheep. How many animals does the farm shelter in all?

Members, please log in to download this worksheet.

Not a member? Please sign up to gain complete access.

www.mathworksheets4kids.com

How many animals does the



- 5) Alice made and sold 505 crocheted pot holders and 325 crocheted headbands. How many items did she sell in all?

