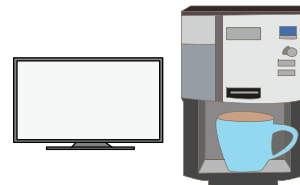



Three-Digit Addition

- 1) At a clearance sale, Juanita saved \$270 when she purchased an LED TV. She went on to save \$100 when she bought a coffee maker. How much money did Juanita save altogether?



- 2) Jacob owns a two-story house. In April, the consumption of electricity was 500 units. The electricity meter recorded 650 units in May. How much electricity was consumed in all?




- 3) Franklin made a total of \$120. What is his total after paying for books and credit-card dues.

Gain complete access to the largest collection of worksheets in all subjects!

Members, please log in to download this worksheet.

Not a member? Please sign up to gain complete access.



- 4) Craig is an avid collector of different denominations of coins. How many different denominations of coins has he accumulated?

How many different denominations of coins has Craig accumulated?



- 5) A Willy Wonka vending machine is stocked with 100 Gobstopper candies and 115 Nerds candies. How many goodies does the vending machine contain altogether?