


Name : _____


Three-Digit & Two-Digit Addition

Sheet 2

- 1) Arnold, an avid philatelist has 54 postage stamps. He also has 967 topical stamps. How many stamps in all does Arnold have in his collection?



- 2) Ryan visited a store. He spent \$143 on grocery and \$39 on confectionery. How much did he spend in total?



- 3) Twenty-six cheerleaders were in a summer camp. There were 272 cheerleaders in all. How many cheerleaders were not in the summer camp?

Gain complete access to the largest collection of worksheets in all subjects!


Members, please log in to download this worksheet.

Not a member? Please sign up to gain complete access.



- 4) Christie and Jude picked apples in a summer camp. Christie picked 100 apples while Jude picked 200 apples. How many apples did Jude pick in all?

www.mathworksheets4kids.com



- 5) Janet read 341 pages of a novel. Seventy-eight pages remained to be read. How many pages did the novel contain altogether?