

# Addition

Regrouping: S3

$$\begin{array}{r} 1) \quad 21 \\ + \quad 9 \\ \hline \end{array}$$

$$\begin{array}{r} 2) \quad 18 \\ + \quad 3 \\ \hline \end{array}$$

$$\begin{array}{r} 3) \quad 7 \\ + 36 \\ \hline \end{array}$$

$$\begin{array}{r} 4) \quad 89 \\ + \quad 9 \\ \hline \end{array}$$

$$\begin{array}{r} 5) \quad 8 \\ + 34 \\ \hline \end{array}$$

$$6) \quad 58$$

$$7) \quad 4$$

$$\begin{array}{r} 8) \quad 1 \\ + 79 \\ \hline \end{array}$$

$$\begin{array}{r} 9) \quad 15 \\ + \quad 8 \\ \hline \end{array}$$

**PREVIEW**

Gain complete access to the largest collection of worksheets in all subjects!

Members, please log in to download this worksheet.

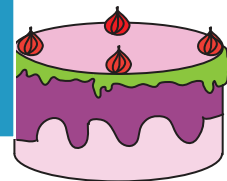
Not a member? Please sign up to gain complete access.

[www.mathworksheets4kids.com](http://www.mathworksheets4kids.com)


$$\begin{array}{r} 12) \quad 9 \\ + 65 \\ \hline \end{array}$$

- 13) Cathy baked 21 cakes today. How many cakes did she bake in total?

even cakes



- 14) Holly sells 39 chicken rolls and 9 vegetable rolls. How many rolls does she sell?



**Answer Key****Addition**

Regrouping: S3

$$\begin{array}{r} 1) \quad 21 \\ + \quad 9 \\ \hline \quad 30 \end{array}$$

$$\begin{array}{r} 2) \quad 18 \\ + \quad 3 \\ \hline \quad 21 \end{array}$$

$$\begin{array}{r} 3) \quad 7 \\ + 36 \\ \hline \quad 43 \end{array}$$

$$\begin{array}{r} 4) \quad 89 \\ + \quad 9 \\ \hline \quad 98 \end{array}$$

$$\begin{array}{r} 5) \quad 8 \\ + 34 \\ \hline \quad 42 \end{array}$$

$$6) \quad 58$$

$$7) \quad 4$$

$$\begin{array}{r} 8) \quad 1 \\ + 79 \\ \hline \quad 80 \end{array}$$

$$\begin{array}{r} 9) \quad 15 \\ + \quad 8 \\ \hline \quad 23 \end{array}$$

**PREVIEW**

Gain complete access to the largest collection of worksheets in all subjects!

Members, please log in to download this worksheet.

Not a member? Please sign up to gain complete access.

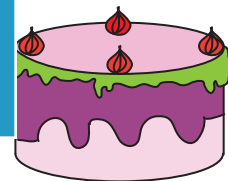
[www.mathworksheets4kids.com](http://www.mathworksheets4kids.com)

$$\begin{array}{r} 12) \quad 9 \\ + 65 \\ \hline \quad 74 \end{array}$$

13) Cathy baked 20 cakes today. How many cakes did she bake in total?

20

even cakes



14) Holly sells 39 chicken rolls and 9 vegetable rolls. How many rolls does she sell?

48

