


Name : _____


Single Digit Addition

Sheet 2

- 1) Juan has a collection of 9 vintage paintings. If he adds 8 antique paintings to it, how many paintings are in his collection?



- 2) Ethan bought 2 pounds of apples and 4 pounds of pears to make jam. How much do the fruits weigh altogether?




- 3) William had 8 papaya many papaya saplings:

and 4 more saplings. How



- 4) Daisy and her friends many refreshments di

es and 7 soft drinks. How



- 5) Gabriel has 5 shirts in

ts are in the wardrobe?

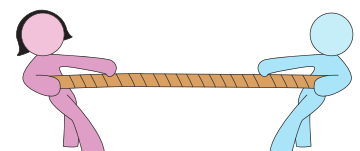


- 6) Oliver bought two crates in it. How many milk cartons did the crates hold in all?

her crate had 7 milk cartons



- 7) Seven children were engaged in a game of tug of war. 3 more children joined them. How many children in all were engaged in the game?



PREVIEW

Gain complete access to the largest collection of worksheets in all subjects!

Members, please log in to download this worksheet.

Not a member? Please sign up to gain complete access.

www.mathworksheets4kids.com