


Name : _____


Two-Digit Addition - Regrouping

Sheet 3

- 1) Ashley decorated her Christmas tree with 15 candy canes and 46 colored-paper stars. How many ornamentals in all did she use to decorate the Christmas tree?



- 2) Lara's dog, Pluto, buried 14 bones in the garden in March. He buried 18 more bones the following month. How many bones did Pluto bury in April?



- 3) The ground stored 25 gallons of rain water during the first week of October. It stored 35 gallons more than the first week of the fortnight. How many gallons of rain water did the tank receive through the fortnight?

Gain complete access to the largest collection of worksheets in all subjects!


Members, please log in to download this worksheet.

Not a member? Please sign up to gain complete access.



- 4) A balloon arch was made up of 25 balloons. How many balloons were used to make the arch if there were 15 more balloons in all?

www.mathworksheets4kids.com



- 5) Samantha has saved up \$95. She also received \$65 in pocket money from her father. How much money does she have altogether?