


Name : _____


Addition - Up to 20

Sheet 1

- 1) On a weekday, the 'Women and Children' coach in a tube train had 15 women and 5 children. How many passengers were on board the coach?



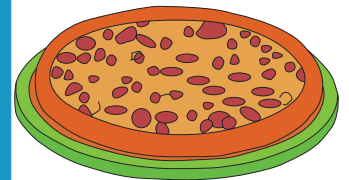
- 2) Mary collects 10 pine cones. Her brother Mike gives her 4 more. How many pine cones does Mary have altogether?



- 3) Cynthia ordered a small pizza with 7 slices. How many slices did she eat?

Gain complete access to the largest collection of worksheets in all subjects!

a small pizza with



- 4) Joshua bought a tin of coconut cookies. How much did the tin cost?

Members, please log in to download this worksheet.

Not a member? Please sign up to gain complete access.

www.mathworksheets4kids.com

tin of coconut cookies.



- 5) A kung fu course has 13 students from the first grade. The course welcomes two more students after a few days. How many students in total are on the course now?

