

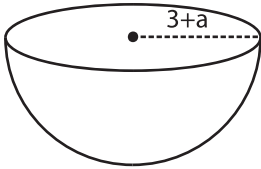
Name : \_\_\_\_\_

## Algebra: Measurement

Single Variable: S4

Find the measurement.

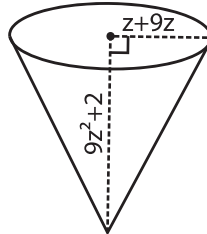
1)  $a = 3$



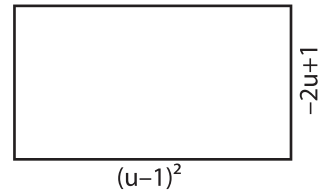
Diameter = \_\_\_\_\_

Radius = \_\_\_\_\_

2)  $z = 1$



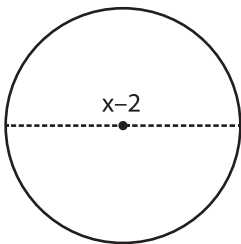
3)  $u = -3$



Length = \_\_\_\_\_

Width = \_\_\_\_\_

4)  $x = 4$



Radius = \_\_\_\_\_

Diameter = \_\_\_\_\_

**PREVIEW**

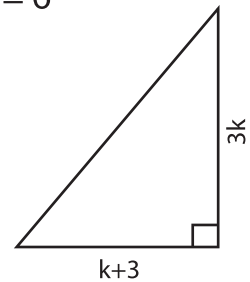
Gain complete access to the largest collection of worksheets in all subjects!

Members, please log in to download this worksheet.

Not a member? Please sign up to gain complete access.

[www.mathworksheets4kids.com](http://www.mathworksheets4kids.com)

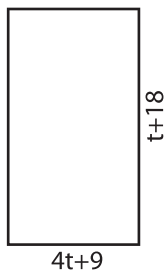
$k = 6$



Height = \_\_\_\_\_

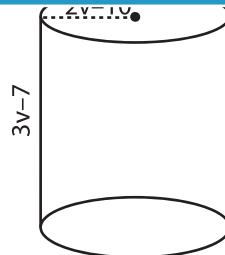
Base = \_\_\_\_\_

7)  $t = -1$



Length = \_\_\_\_\_

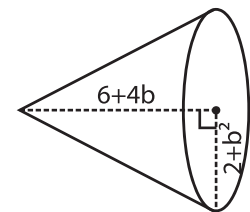
Width = \_\_\_\_\_



Height = \_\_\_\_\_

Radius = \_\_\_\_\_

$b = 2$



Radius = \_\_\_\_\_

Height = \_\_\_\_\_