

Name : \_\_\_\_\_

# Counting Angles

Count the number of angles of each type in the following figures.

1)

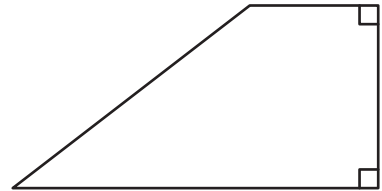


Number of acute angles: \_\_\_\_\_

Number of right angles: \_\_\_\_\_

Number of obtuse angles: \_\_\_\_\_

2)

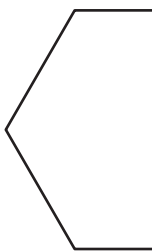


Number of acute angles: \_\_\_\_\_

Number of right angles: \_\_\_\_\_

Number of obtuse angles: \_\_\_\_\_

3)



Number of acute angles: \_\_\_\_\_

Number of right angles: \_\_\_\_\_

Number of obtuse angles: \_\_\_\_\_

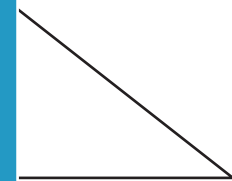
**PREVIEW**

Gain complete access to the largest collection of worksheets in all subjects!

Members, please log in to download this worksheet.

Not a member? Please sign up to gain complete access.

[www.mathworksheets4kids.com](http://www.mathworksheets4kids.com)

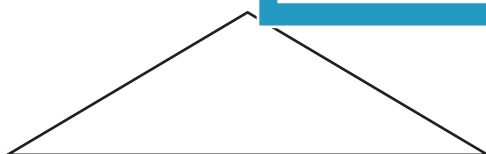


Number of acute angles: \_\_\_\_\_

Number of right angles: \_\_\_\_\_

Number of obtuse angles: \_\_\_\_\_

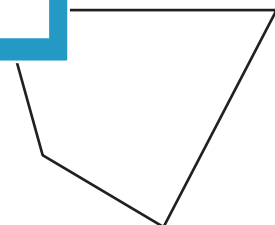
5)



Number of acute angles: \_\_\_\_\_

Number of right angles: \_\_\_\_\_

Number of obtuse angles: \_\_\_\_\_



Number of acute angles: \_\_\_\_\_

Number of right angles: \_\_\_\_\_

Number of obtuse angles: \_\_\_\_\_