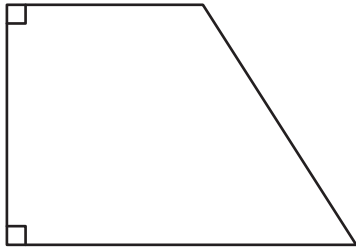


Counting Angles

Count the number of angles of each type in the following figures.

1)

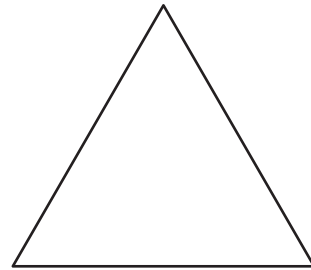


Number of acute angles: _____

Number of right angles: _____

Number of obtuse angles: _____

2)

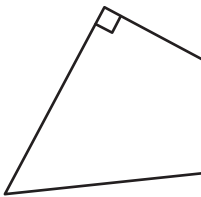


Number of acute angles: _____

Number of right angles: _____

Number of obtuse angles: _____

3)



Number of acute angles: _____

Number of right angles: _____

Number of obtuse angles: _____

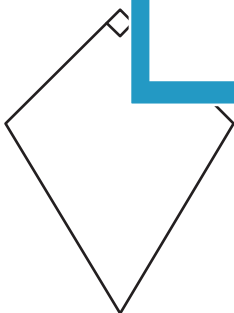


Number of acute angles: _____

Number of right angles: _____

Number of obtuse angles: _____

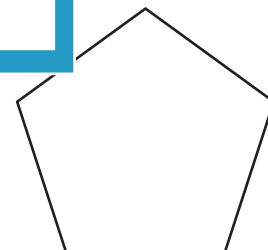
5)



Number of acute angles: _____

Number of right angles: _____

Number of obtuse angles: _____



Number of acute angles: _____

Number of right angles: _____

Number of obtuse angles: _____

PREVIEW

Gain complete access to the largest collection of worksheets in all subjects!

Members, please log in to download this worksheet.

Not a member? Please sign up to gain complete access.

www.mathworksheets4kids.com