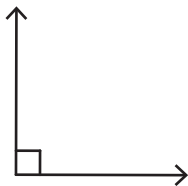


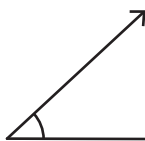
Acute, Right, and Obtuse Angles - Revision

A) Identify each angle as acute, right, or obtuse.

1)



2)



1)



2)



B) Count the number of

1)




Number of acute ang _____

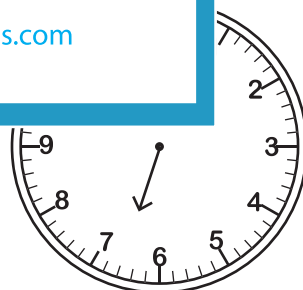
Number of right ang _____

Number of obtuse ang _____

C) Draw the minute hand formed between the

1) 8:06





D) What type of angles are there in the letter "N"?

a) right and acute angles

b) acute angles only

c) right angles only

PREVIEW

Gain complete access to the largest collection of worksheets in all subjects!

Members, please log in to download this worksheet.

Not a member? Please sign up to gain complete access.

www.mathworksheets4kids.com