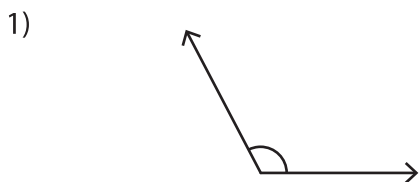
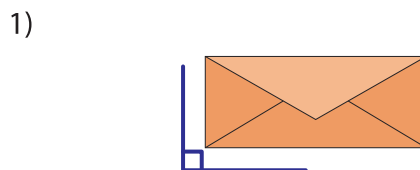
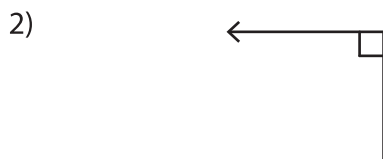



Acute, Right, and Obtuse Angles - Revision

A) Identify each angle as acute, right, or obtuse.









B) Count the number of



Number of acute ang

Number of right ang

Number of obtuse ang

PREVIEW

Gain complete access to the largest collection of worksheets in all subjects!

Members, please log in to download this worksheet.

Not a member? Please sign up to gain complete access.

www.mathworksheets4kids.com


angles: _____

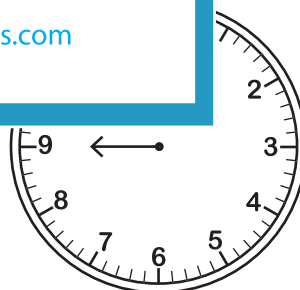
angles: _____

angles: _____

C) Draw the minute hand formed between the

1) 10:03





Identify the type of angle
K.

D) What type of angles are there in the letter "L" ?

a) acute and obtuse angles

b) right angles only

c) acute angles only