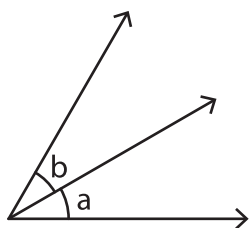


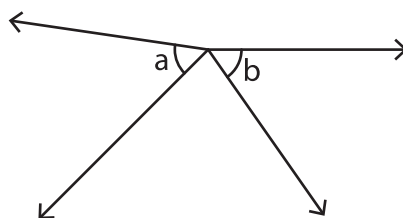
Adjacent Angles

A) State whether the indicated angle pairs are adjacent or not.

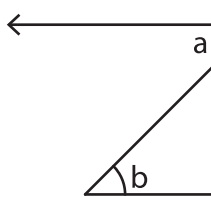
1)



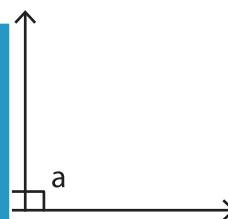
2)



3)

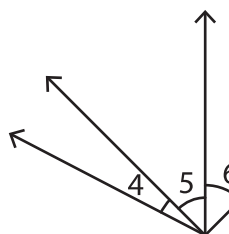



4)



B) Identify the two pairs of adjacent angles in the figure.

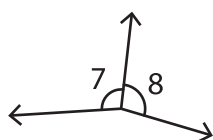
1)



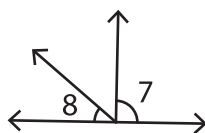


C) 1) In which of the following pairs of adjacent angles are the angles adjacent?

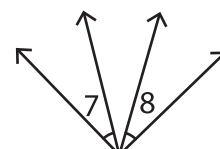
i)



ii)



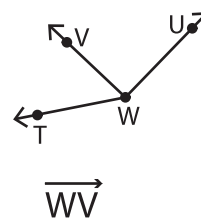
iii)



2) Identify the arm common to the adjacent angles in the figure.

i) \overrightarrow{WT}

ii) \overrightarrow{WU}



\overrightarrow{WV}