

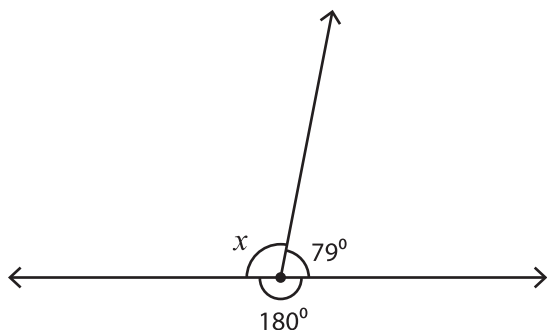
Name : _____

Angles Around a Point

Sheet 3

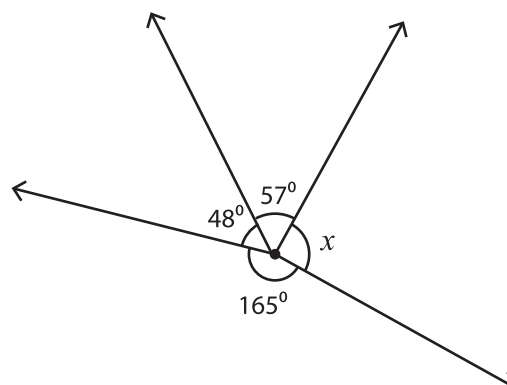
Find the measure of each unknown angle.

1)



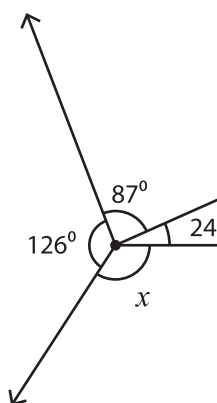
$x =$ _____

2)



$=$ _____

3)



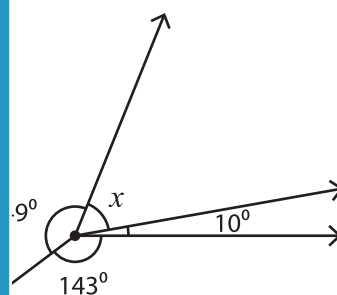
$x =$ _____

PREVIEW
Gain complete access to the largest
collection of worksheets in all subjects!

Members, please
log in to
download this
worksheet.

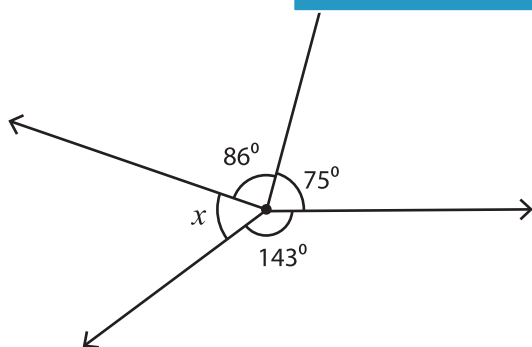
Not a member?
Please sign up to
gain complete
access.

www.mathworksheets4kids.com

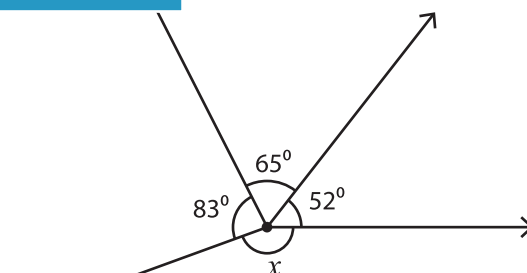


$=$ _____

5)



$x =$ _____



$x =$ _____