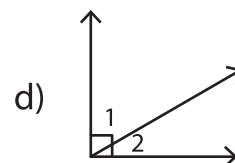
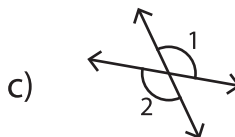
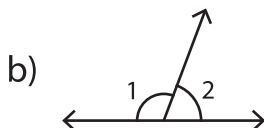
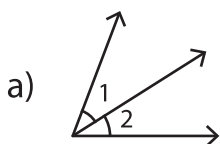


# Complementary Angles

A) 1) Find the pair of angles that are complementary.

- a)  $63^\circ, 27^\circ$       b)  $45^\circ, 95^\circ$       c)  $38^\circ, 42^\circ$       d)  $30^\circ, 51^\circ$

2) Which of the following is a pair of complementary angles?



B) Match the following

1) Complement of

2) Complement of

3) Complement of

4) Complement of

$5^\circ$

$36^\circ$

$78^\circ$

$60^\circ$

# PREVIEW

Gain complete access to the largest  
collection of worksheets in all subjects!

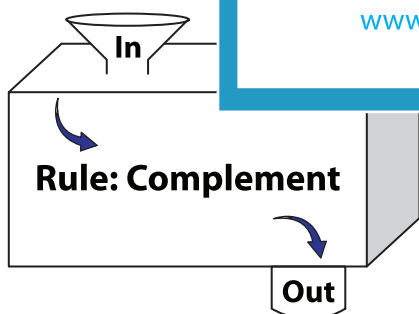
Members, please  
log in to  
download this  
worksheet.

Not a member?  
Please sign up to  
gain complete  
access.

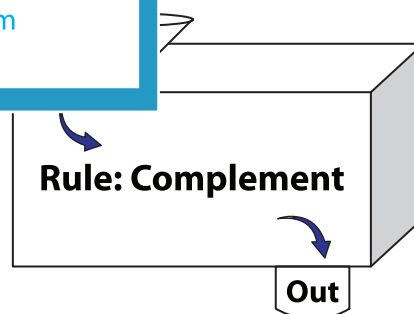
[www.mathworksheets4kids.com](http://www.mathworksheets4kids.com)

C) Complete the in a

1)



<b>In</b>	$9^\circ$	$35^\circ$	$28^\circ$	$70^\circ$
<b>Out</b>				



<b>In</b>	$14^\circ$	$59^\circ$	$6^\circ$	$67^\circ$
<b>Out</b>				