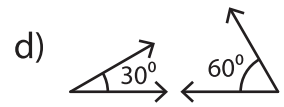
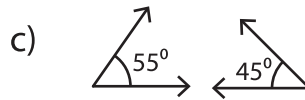
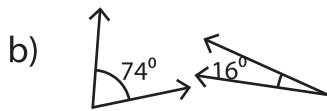
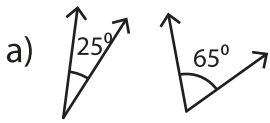


Complementary Angles

A) 1) Find the pair of angles that are not complementary.



2) Find the pair of angles that are complementary.

a) $57^\circ, 23^\circ$

b) $75^\circ, 15^\circ$

c) $26^\circ, 71^\circ$

d) $12^\circ, 63^\circ$

B) Match the following

1) Complement of

2) Complement of

3) Complement of

4) Complement of

57°

35°

84°

41°

PREVIEW

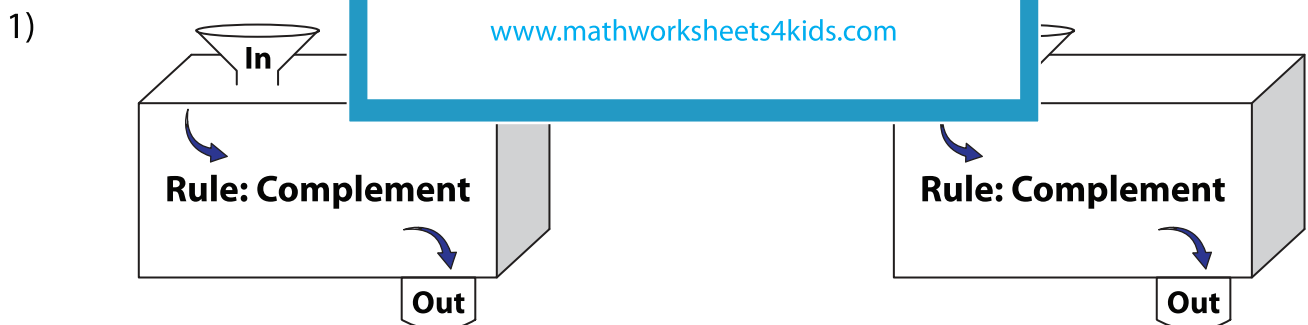
Gain complete access to the largest collection of worksheets in all subjects!

Members, please log in to download this worksheet.

Not a member? Please sign up to gain complete access.

www.mathworksheets4kids.com

C) Complete the in a



In	26°	44°	54°	19°
Out				

In	69°	31°	74°	24°
Out				