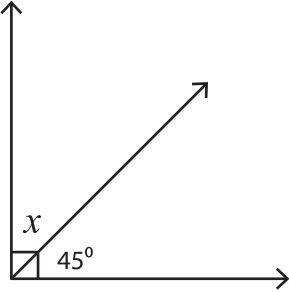


Name : \_\_\_\_\_

## Finding Complementary Angles

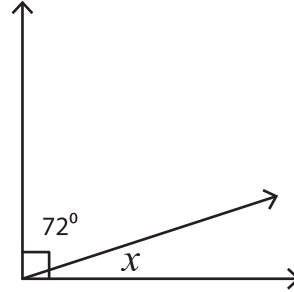
Find the value of  $x$  in each right angle.

1)



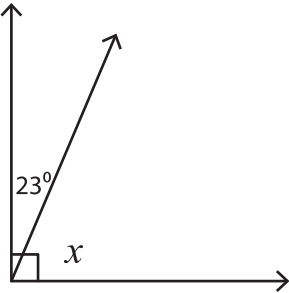
$x =$  \_\_\_\_\_

2)



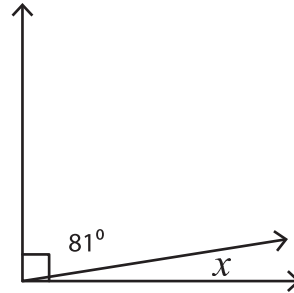
$x =$  \_\_\_\_\_

3)



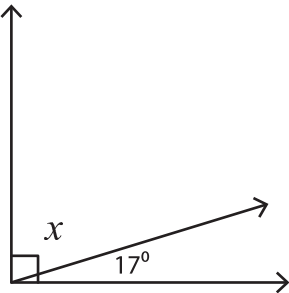
$x =$  \_\_\_\_\_

4)



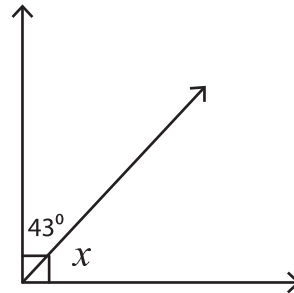
$x =$  \_\_\_\_\_

5)



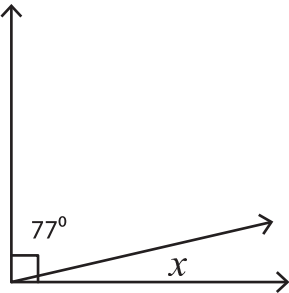
$x =$  \_\_\_\_\_

6)



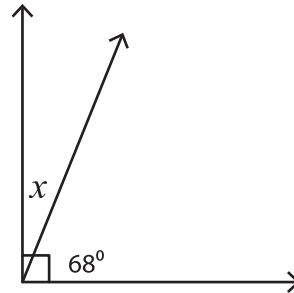
$x =$  \_\_\_\_\_

7)



$x =$  \_\_\_\_\_

8)



$x =$  \_\_\_\_\_