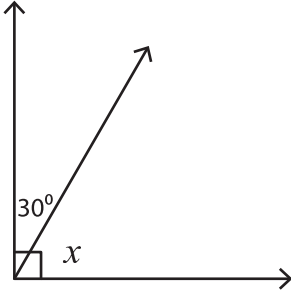


Finding Complementary Angles

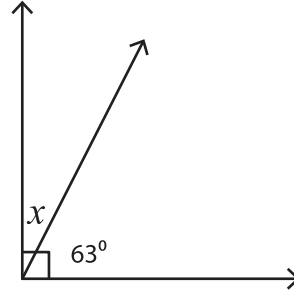
Find the value of x in each right angle.

1)



$x =$ _____

2)



$x =$ _____

3)



$x =$ _____

PREVIEW

Gain complete access to the largest
collection of worksheets in all subjects!

Members, please
log in to
download this
worksheet.

Not a member?
Please sign up to
gain complete
access.

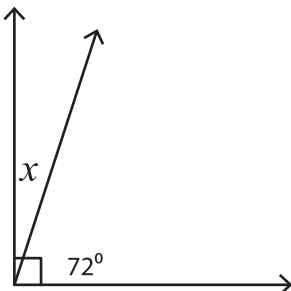
www.mathworksheets4kids.com

5)



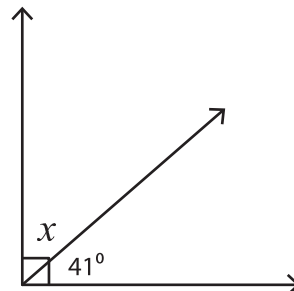
$x =$ _____

7)



$x =$ _____

8)



$x =$ _____