

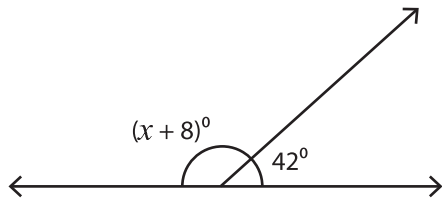
Name : _____

Complementary & Supplementary Angles

One-step: S3

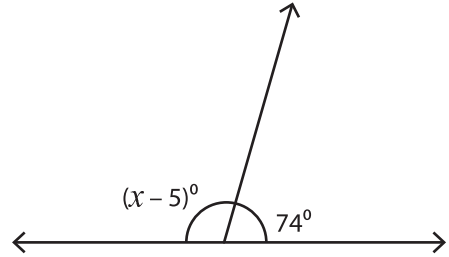
Find the value of x .

1)



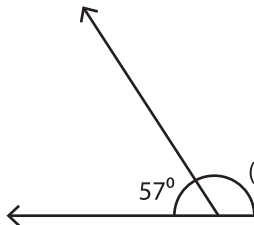
$x =$ _____

2)



$x =$ _____

3)



$x =$ _____

PREVIEW

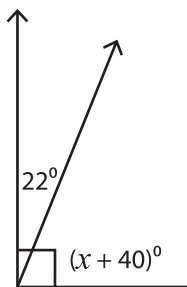
Gain complete access to the largest collection of worksheets in all subjects!

Members, please log in to download this worksheet.


Not a member? Please sign up to gain complete access.

www.mathworksheets4kids.com

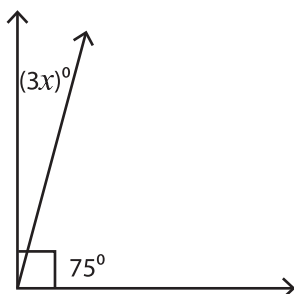
5)



$x =$ _____

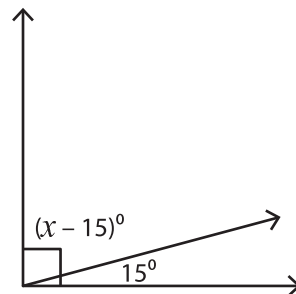


7)



$x =$ _____

8)



$x =$ _____