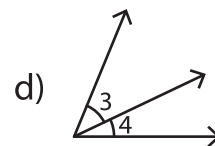
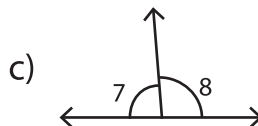
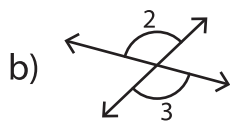
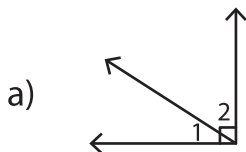


Complementary & Supplementary Angles - Revision

A) 1) Which of the following is a pair of complementary angles?



2) Which of the following is a supplement of 92° ?

a) 90°

b) 92°

c) 86°

d) 88°

B) 1) The measure of a smaller angle.

_____ and the measure of the

PREVIEW

Gain complete access to the largest
collection of worksheets in all subjects!

Members, please
log in to
download this
worksheet.

Not a member?
Please sign up to
gain complete
access.

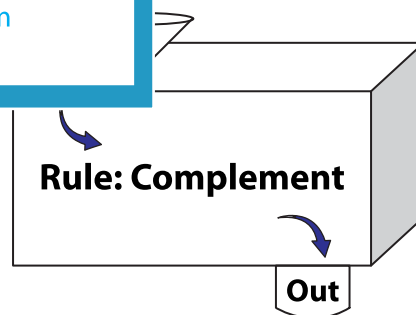
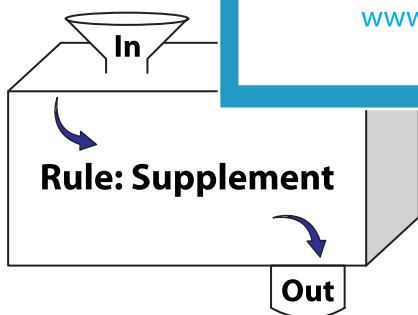
www.mathworksheets4kids.com

2) If $\angle A$ and $\angle B$ are _____
angles.

_____ the measures of the

C) Complete the in a

1)



In	35°	90°	123°	159°
Out				

In	18°	47°	64°	79°
Out				