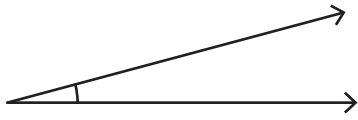


Name : \_\_\_\_\_

# Estimating Angles

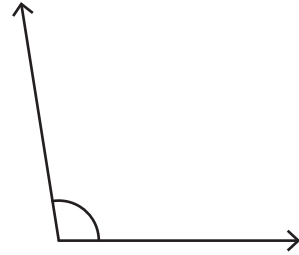
Estimate the measure of each angle.

1)



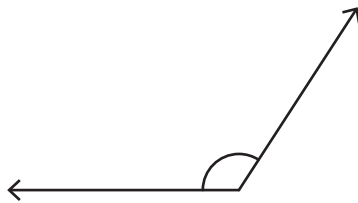
\_\_\_\_\_

2)



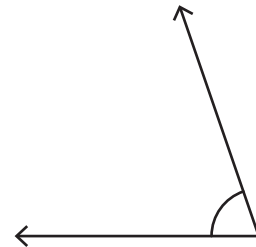
\_\_\_\_\_

3)



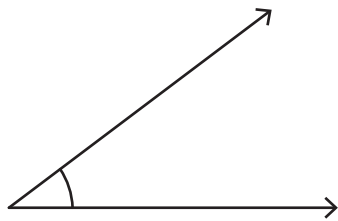
\_\_\_\_\_

4)



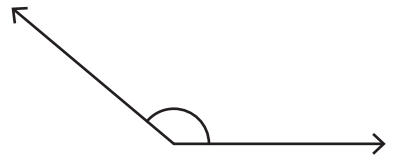
\_\_\_\_\_

5)



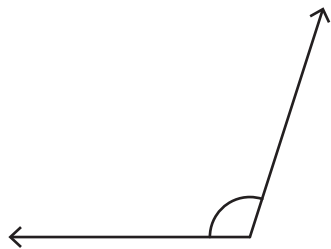
\_\_\_\_\_

6)



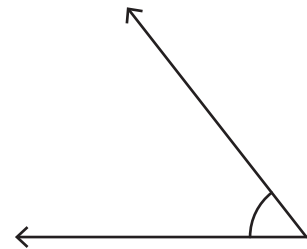
\_\_\_\_\_

7)



\_\_\_\_\_

8)



\_\_\_\_\_