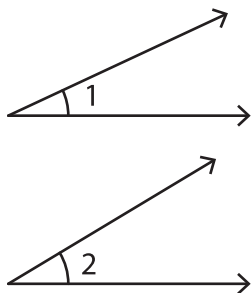


# Estimate, Measure, and Compare

1)



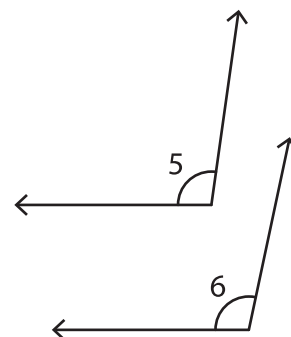
Compare and estimate which is the larger angle. \_\_\_\_\_

Exact measure of $\angle 1$	Exact measure of $\angle 2$	Was your estimation correct?

2)

Compare and estimate which is the larger angle.

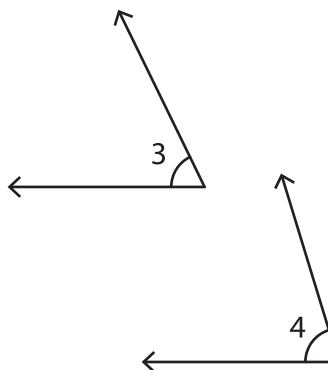
Exact measure of $\angle 5$



Compare and estimate which is the larger angle. \_\_\_\_\_

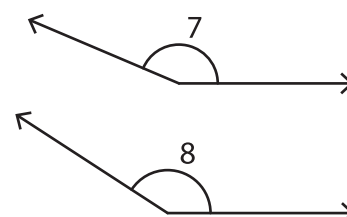
Exact measure of $\angle 5$	Exact measure of $\angle 6$	Was your estimation correct?

3)



Compare and estimate which is the smaller angle. \_\_\_\_\_

Exact measure of $\angle 7$	Exact measure of $\angle 8$	Was your estimation correct?



## PREVIEW

Gain complete access to the largest collection of worksheets in all subjects!

Members, please log in to download this worksheet.

Not a member? Please sign up to gain complete access.

www.mathworksheets4kids.com