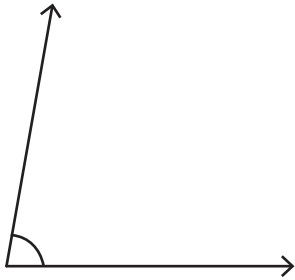


# Estimating Angles

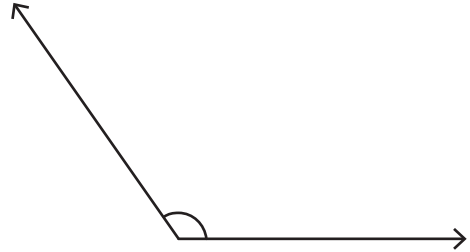
Choose the best estimation for the measure of each angle.

1)



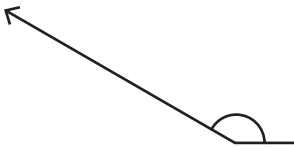
- a)  $70^\circ$  approx
- b)  $80^\circ$  approx
- c)  $90^\circ$  approx

2)



- a)  $125^\circ$  approx
- b)  $140^\circ$  approx
- c)  $155^\circ$  approx

3)



- a)  $135^\circ$  approx
- b)  $140^\circ$  approx
- c)  $150^\circ$  approx

## PREVIEW

Gain complete access to the largest collection of worksheets in all subjects!

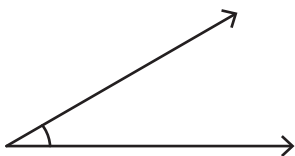
Members, please log in to download this worksheet.

Not a member? Please sign up to gain complete access.

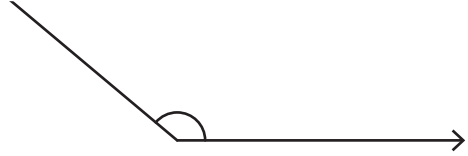
www.mathworksheets4kids.com

- a)  $155^\circ$  approx
- b)  $165^\circ$  approx
- c)  $175^\circ$  approx

5)



- a)  $20^\circ$  approx
- b)  $30^\circ$  approx
- c)  $45^\circ$  approx



- a)  $115^\circ$  approx
- b)  $130^\circ$  approx
- c)  $140^\circ$  approx