

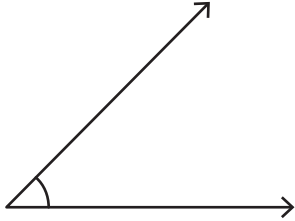
Name : \_\_\_\_\_

## Estimating Angles

MS1

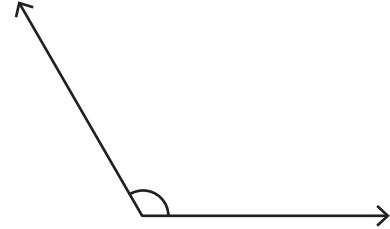
Choose the best estimation for the measure of each angle.

1)



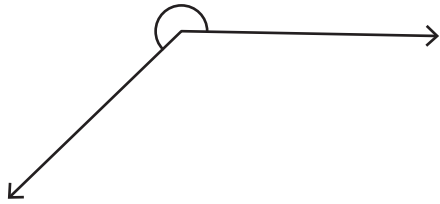
- a)  $30^\circ$  approx
- b)  $45^\circ$  approx
- c)  $50^\circ$  approx

2)



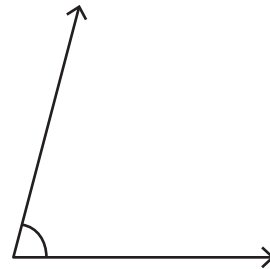
- a)  $100^\circ$  approx
- b)  $110^\circ$  approx
- c)  $120^\circ$  approx

3)



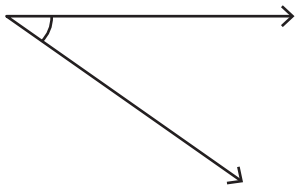
- a)  $255^\circ$  approx
- b)  $225^\circ$  approx
- c)  $260^\circ$  approx

4)



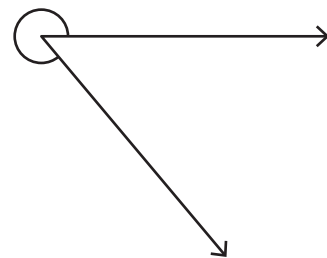
- a)  $75^\circ$  approx
- b)  $85^\circ$  approx
- c)  $90^\circ$  approx

5)



- a)  $35^\circ$  approx
- b)  $20^\circ$  approx
- c)  $50^\circ$  approx

6)



- a)  $50^\circ$  approx
- b)  $280^\circ$  approx
- c)  $310^\circ$  approx