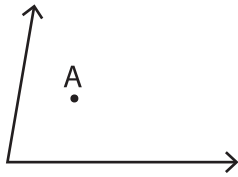


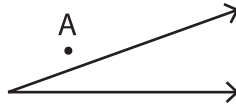
Interior and Exterior of an Angle

Example 1



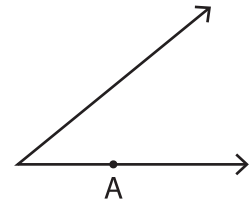
A is in the interior

Example 2



A is in the exterior

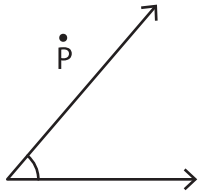
Example 3



A is on the angle

Identify if the given point is in the interior, exterior, or on the angle.

1)



2)

3)



PREVIEW

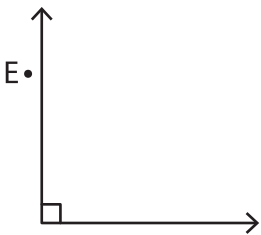
Gain complete access to the largest collection of worksheets in all subjects!

Members, please log in to download this worksheet.

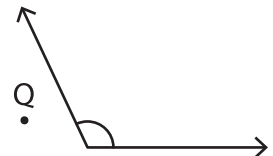
Not a member? Please sign up to gain complete access.

www.mathworksheets4kids.com

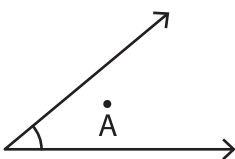
4)



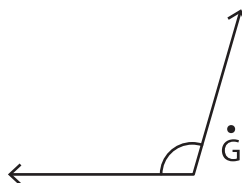
5)



7)



8)



9)

