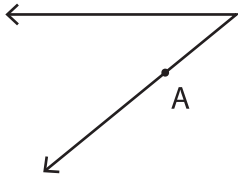


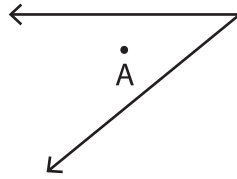
Interior and Exterior of an Angle

Example 1



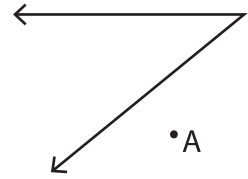
A is on the angle

Example 2



A is in the interior

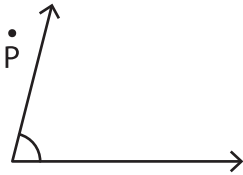
Example 3



A is in the exterior

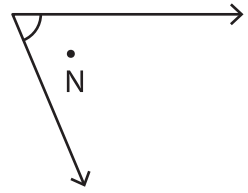
Identify if the given point is in the interior, exterior, or on the angle.

1)



2)

3)



PREVIEW

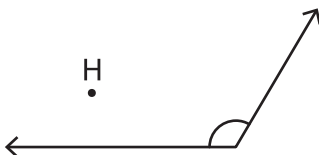
Gain complete access to the largest collection of worksheets in all subjects!

Members, please log in to download this worksheet.

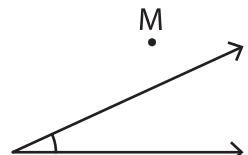
Not a member? Please sign up to gain complete access.

www.mathworksheets4kids.com

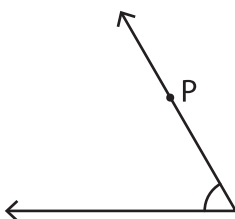
4)



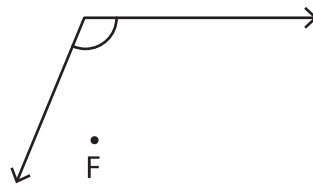
5)



7)



8)



9)

