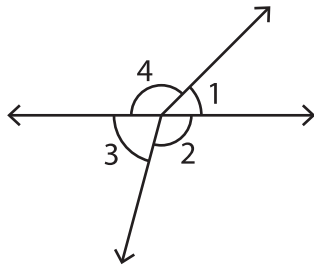


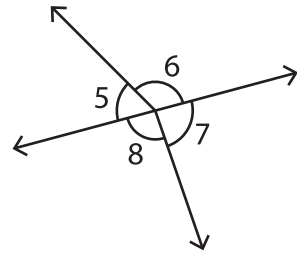
Linear Pairs

A) Identify all the linear pairs in each figure.

1)



2)



3)



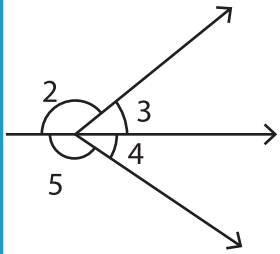
PREVIEW

Gain complete access to the largest collection of worksheets in all subjects!

Members, please log in to download this worksheet.

Not a member? Please sign up to gain complete access.

www.mathworksheets4kids.com



B) Identify the angle

ified angle.

1) $\angle POQ$ _____ or _____

2) $\angle UOV$ _____ or _____

3) $\angle WOV$ _____ or _____

4) $\angle TOU$ _____ or _____