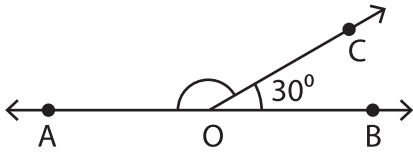


Linear Pairs

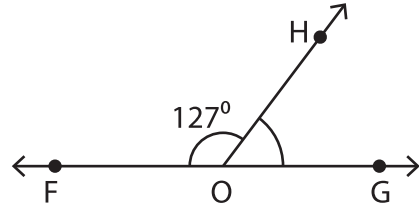
A) Find the measure of the indicated angle in each linear pair.

1)



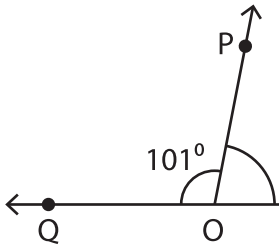
$m\angle AOC =$ _____

2)



$m\angle GOH =$ _____

3)



$m\angle ROP =$ _____


PREVIEW

Gain complete access to the largest collection of worksheets in all subjects!

Members, please log in to download this worksheet.

Not a member? Please sign up to gain complete access.

www.mathworksheets4kids.com



B) 1) If $\angle 1$ and $\angle 2$ form _____ angles.

_____ the measures of the

2) If the difference in _____ angles.

_____ find the measures of the

3) Two angles form a linear pair. If the measure of one angle is five times the measure of the other, what are the measures of the angles?