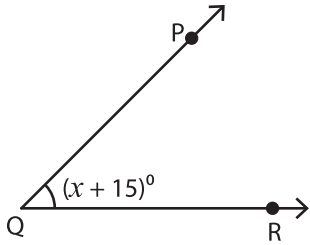


Measuring Angles - Find x

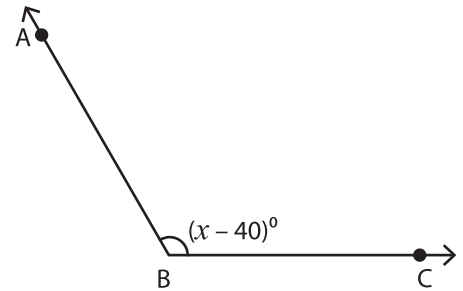
Measure each angle, and find the value of x .

1)



$m\angle PQR = \underline{\hspace{2cm}}$, $x = \underline{\hspace{2cm}}$

2)



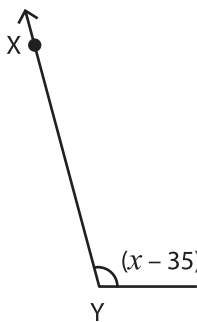
$m\angle ABC = \underline{\hspace{2cm}}$, $x = \underline{\hspace{2cm}}$

3)



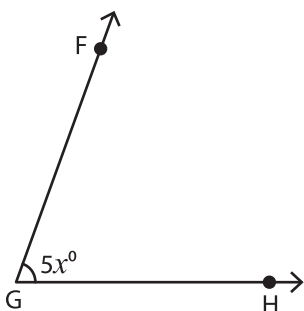
$m\angle EFG = \underline{\hspace{2cm}}$

5)



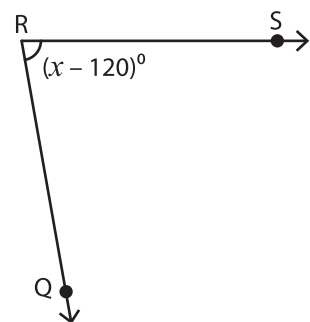
$m\angle XYZ = \underline{\hspace{2cm}}$

7)



$m\angle FGH = \underline{\hspace{2cm}}$, $x = \underline{\hspace{2cm}}$

8)



$m\angle QRS = \underline{\hspace{2cm}}$, $x = \underline{\hspace{2cm}}$

PREVIEW

Gain complete access to the largest collection of worksheets in all subjects!

Members, please log in to download this worksheet.

Not a member? Please sign up to gain complete access.

www.mathworksheets4kids.com

