

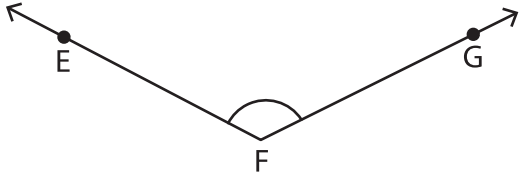
Name : _____

Measuring Angles

Inner & outer scales: S3

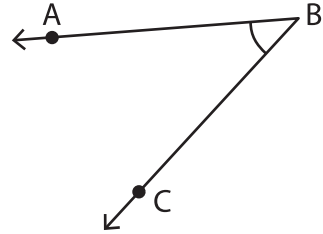
Measure each angle using a protractor.

1)



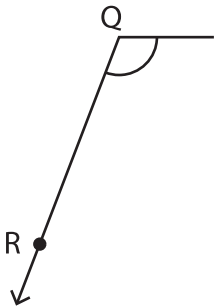
$m\angle EFG =$ _____

2)

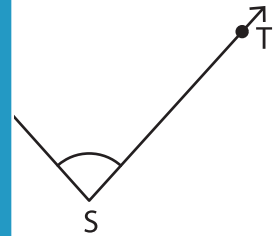


$m\angle ABC =$ _____

3)

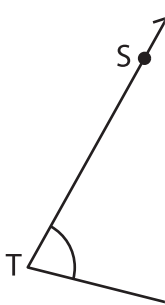


$m\angle PQR =$ _____

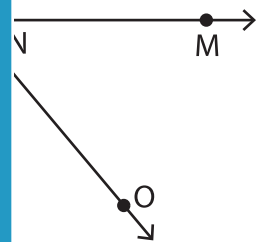


$\Gamma =$ _____

5)



$m\angle STU =$ _____



$\text{D} =$ _____

PREVIEW

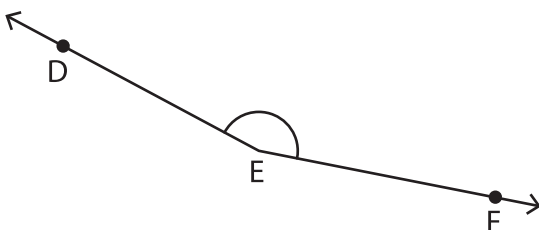
Gain complete access to the largest collection of worksheets in all subjects!

Members, please log in to download this worksheet.

Not a member? Please sign up to gain complete access.

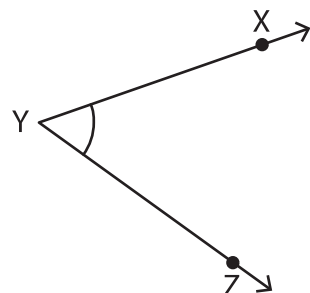
www.mathworksheets4kids.com

7)



$m\angle DEF =$ _____

8)



$m\angle XYZ =$ _____