

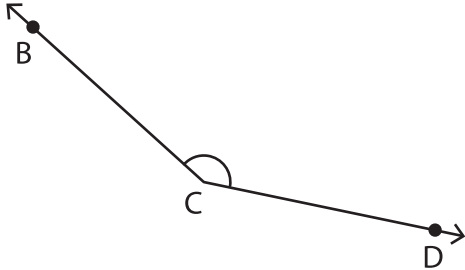
Name : _____

Measuring Angles - 5° Increments

Inner & outer scales: S2

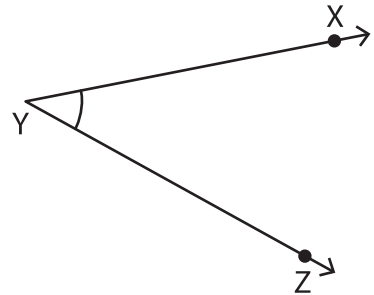
Measure each angle using a protractor.

1)



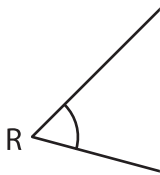
$m\angle BCD =$ _____

2)



$m\angle XYZ =$ _____

3)



$m\angle QRS =$ _____

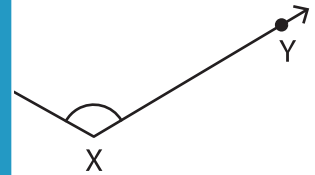
PREVIEW

Gain complete access to the largest collection of worksheets in all subjects!

Members, please log in to download this worksheet.

Not a member? Please sign up to gain complete access.

www.mathworksheets4kids.com

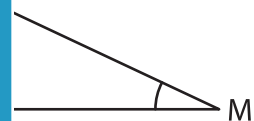


$m\angle XYZ =$ _____

5)

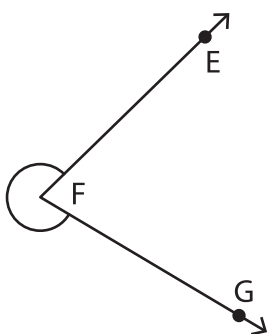


$m\angle STU =$ _____



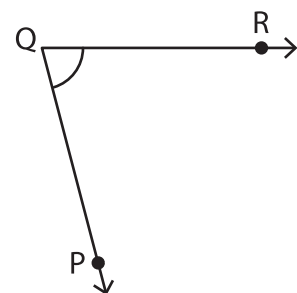
$m\angle M =$ _____

7)



$m\angle EFG =$ _____

8)



$m\angle PQR =$ _____