

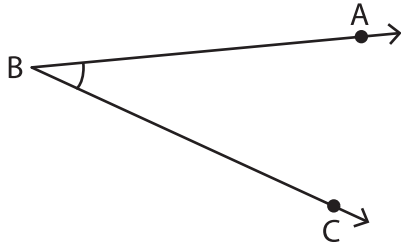
Name : \_\_\_\_\_

## Measuring Angles - 5° Increments

Inner & outer scales: S3

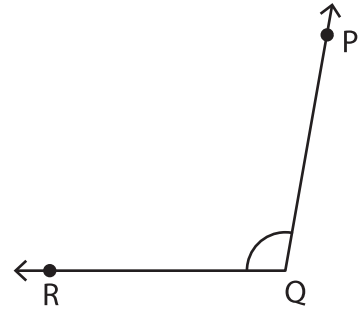
Measure each angle using a protractor.

1)



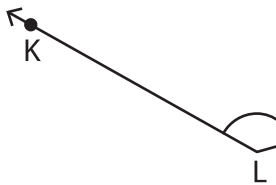
$m\angle ABC =$  \_\_\_\_\_

2)



$m\angle POR =$  \_\_\_\_\_

3)



$m\angle KLM =$  \_\_\_\_\_

# PREVIEW

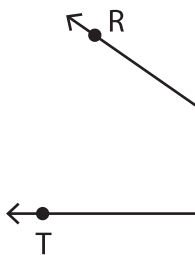
Gain complete access to the largest collection of worksheets in all subjects!

Members, please log in to download this worksheet.

Not a member? Please sign up to gain complete access.

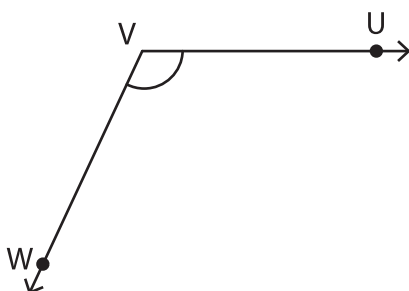
[www.mathworksheets4kids.com](http://www.mathworksheets4kids.com)

5)



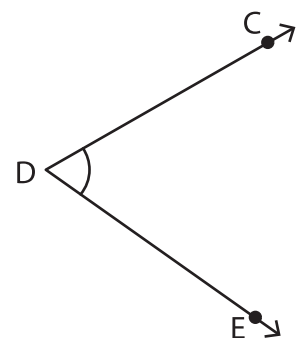
$m\angle RST =$  \_\_\_\_\_

7)



$m\angle UVW =$  \_\_\_\_\_

8)



$m\angle CDE =$  \_\_\_\_\_