

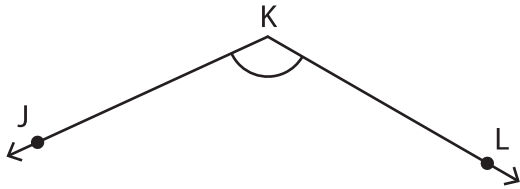
Name : _____

Measuring Angles - 5° Increments

Inner & outer scales: S4

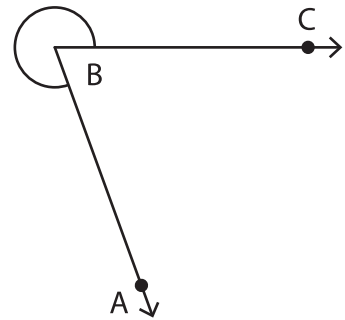
Measure each angle using a protractor.

1)



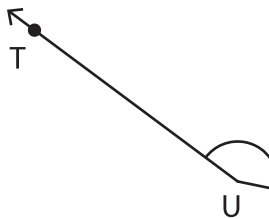
$m\angle LKJ =$ _____

2)



$m\angle CBA =$ _____

3)




$m\angle TUV =$ _____

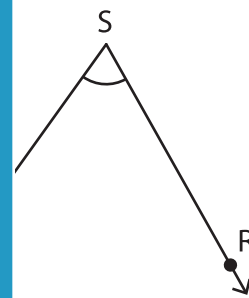


$m\angle HGI =$ _____

5)

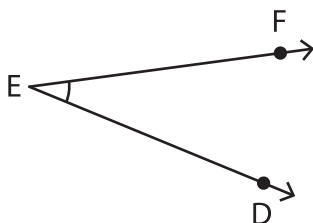


$m\angle ZYX =$ _____



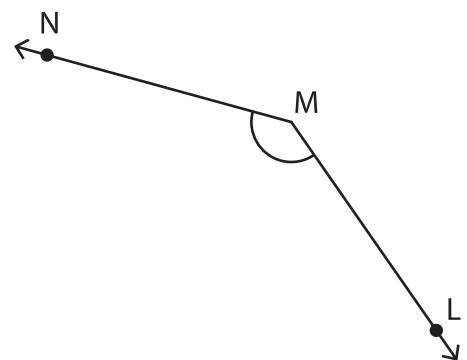
$m\angle RSQ =$ _____

7)



$m\angle FED =$ _____

8)



$m\angle LMN =$ _____

PREVIEW

Gain complete access to the largest collection of worksheets in all subjects!

Members, please log in to download this worksheet.

Not a member? Please sign up to gain complete access.

www.mathworksheets4kids.com