

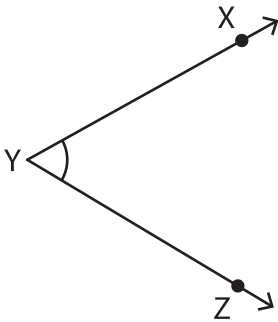
Name : _____

Measuring Angles

Inner & outer scales: S5

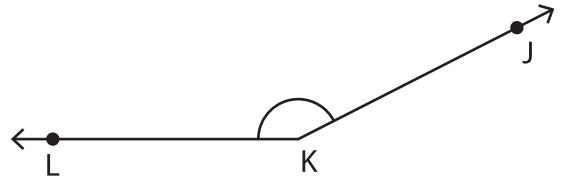
Measure each angle using a protractor.

1)



$m\angle ZYX =$ _____

2)



$m\angle JKL =$ _____

3)



$m\angle TUV =$ _____

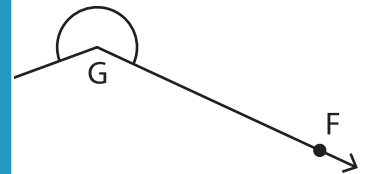
PREVIEW

Gain complete access to the largest collection of worksheets in all subjects!

Members, please log in to download this worksheet.

Not a member? Please sign up to gain complete access.

www.mathworksheets4kids.com



$m\angle HGF =$ _____

5)

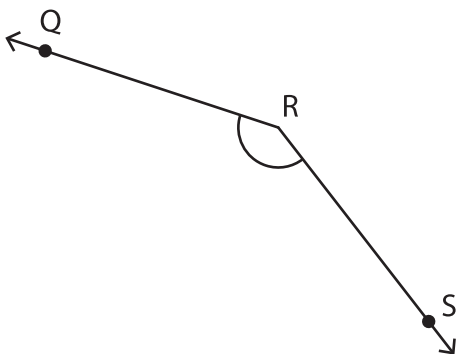


$m\angle WXY =$ _____



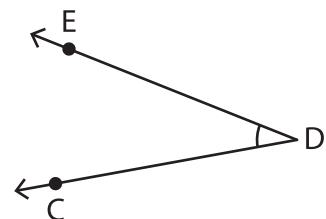
$m\angle BAC =$ _____

7)



$m\angle SRQ =$ _____

8)



$m\angle EDC =$ _____