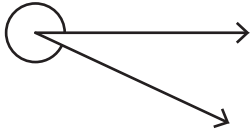


Name : \_\_\_\_\_

# Measuring Reflex Angles

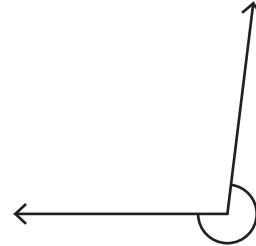
Measure each reflex angle.

1)



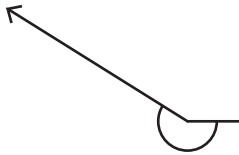
Angle: \_\_\_\_\_

2)



Angle: \_\_\_\_\_

3)



Angle: \_\_\_\_\_



\_\_\_\_\_

5)



Angle: \_\_\_\_\_



\_\_\_\_\_

**PREVIEW**

Gain complete access to the largest collection of worksheets in all subjects!

Members, please log in to download this worksheet.

Not a member? Please sign up to gain complete access.

[www.mathworksheets4kids.com](http://www.mathworksheets4kids.com)

7)



Angle: \_\_\_\_\_

8)



Angle: \_\_\_\_\_