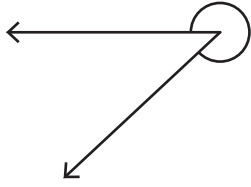


# Measuring Reflex Angles

Measure each reflex angle.

1)



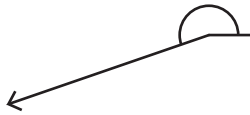
Angle: \_\_\_\_\_

2)




Angle: \_\_\_\_\_

3)

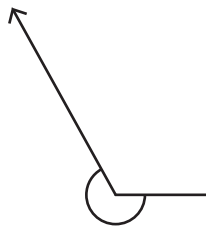


Angle: \_\_\_\_\_



\_\_\_\_\_

5)

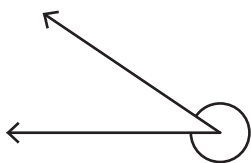


Angle: \_\_\_\_\_



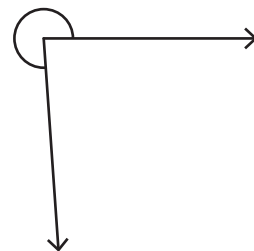
\_\_\_\_\_

7)



Angle: \_\_\_\_\_

8)



Angle: \_\_\_\_\_

**PREVIEW**

Gain complete access to the largest collection of worksheets in all subjects!

Members, please log in to download this worksheet.

Not a member? Please sign up to gain complete access.

[www.mathworksheets4kids.com](http://www.mathworksheets4kids.com)