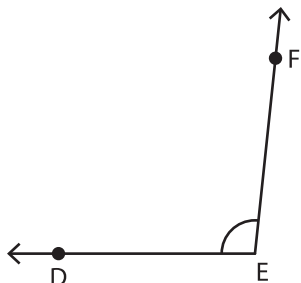


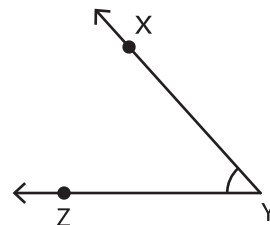
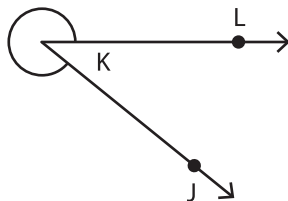
Measuring Angles - Revision

A) Measure each angle using a protractor.

- 1) 2) 3)




m∠DEF = _____



m∠ZYX = _____

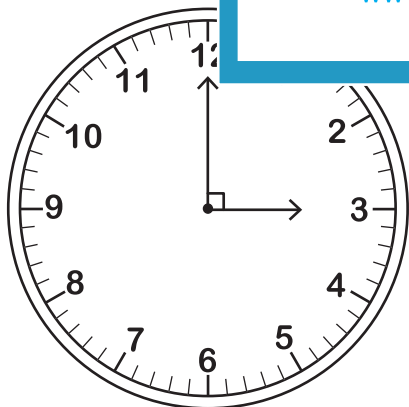
B) Find the angle formed by the hour and minute hands of a clock.

- 1)



Angle: _____

- 2)



Angle: _____

PREVIEW

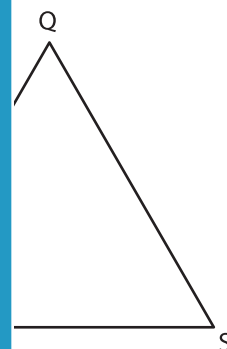
Gain complete access to the largest collection of worksheets in all subjects!

Members, please log in to download this worksheet.

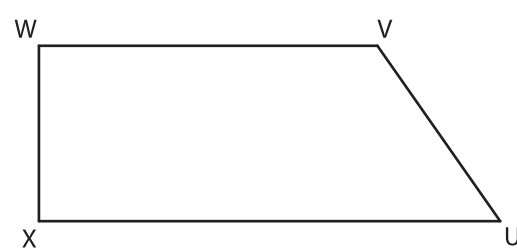
Not a member? Please sign up to gain complete access.

www.mathworksheets4kids.com

Find the indicated angle using a protractor.



m∠Q = _____



m∠WVU = _____