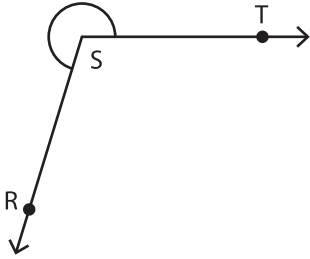


Name : _____

Measuring Angles - Revision

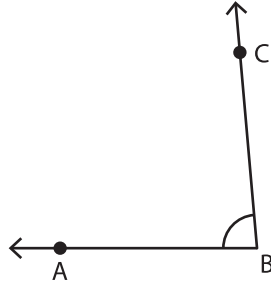
A) Measure each angle using a protractor.

1)

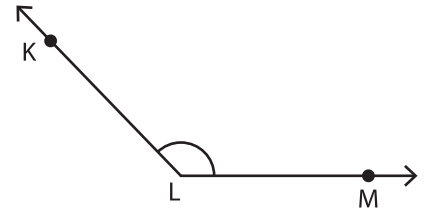


$m\angle TSR =$ _____

2)




3)



$m\angle MLK =$ _____

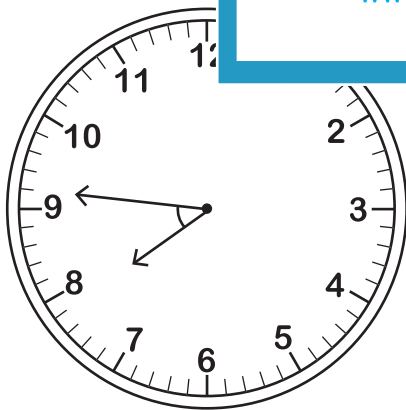
B) Find the angle formed by the hour and minute hands of a clock.

1)



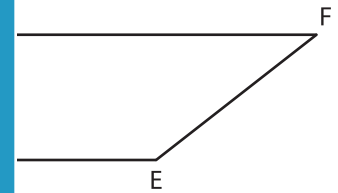
Angle: _____

2)

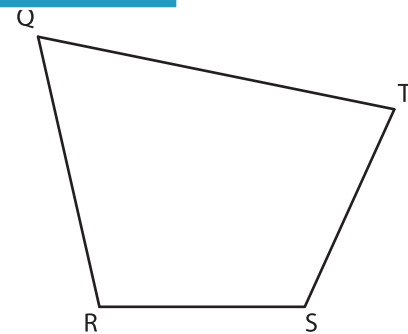


Angle: _____

Find the indicated angle using a protractor.



Angle: _____



$m\angle QTS =$ _____

PREVIEW

Gain complete access to the largest collection of worksheets in all subjects!

Members, please log in to download this worksheet.

Not a member? Please sign up to gain complete access.

www.mathworksheets4kids.com