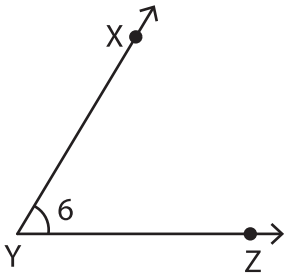


Representation of Angles

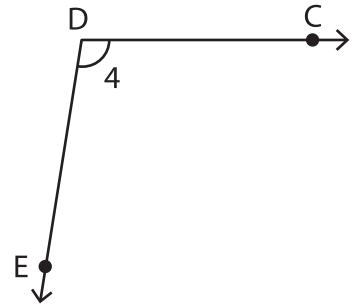
Write the missing representation of each angle.

1)



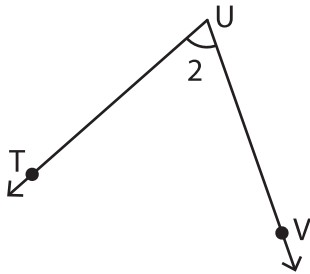
_____ \cong $\angle ZYX \cong \angle Y \cong \angle 6$

2)



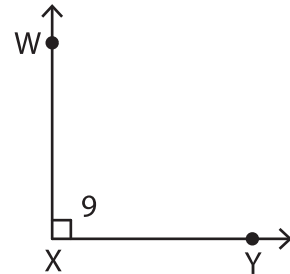
$\angle CDE \cong$ _____ $\cong \angle 4 \cong \angle EDC$

3)



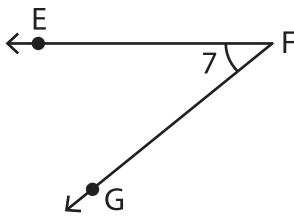
$\angle 2 \cong \angle TUV \cong$ _____ $\cong \angle U$

4)



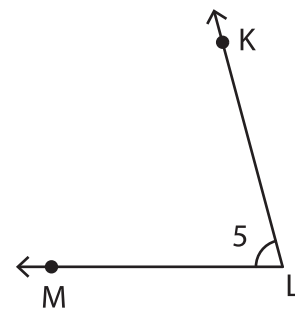
$\angle X \cong \angle WXY \cong \angle YXW \cong$ _____

5)



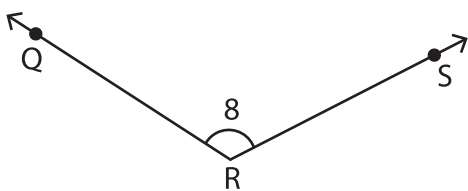
$\angle EFG \cong$ _____ $\cong \angle 7 \cong \angle F$

6)



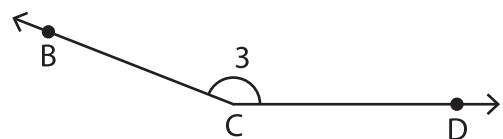
_____ $\cong \angle KLM \cong \angle MLK \cong \angle 5$

7)



$\angle 8 \cong \angle SRQ \cong$ _____ $\cong \angle QRS$

8)



$\angle DCB \cong \angle C \cong \angle 3 \cong$ _____