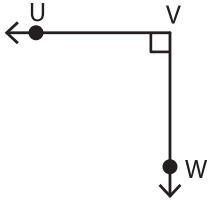


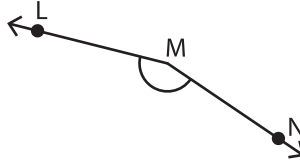
Naming Angles - Revision

A) Use all the three points and name each angle in two different ways.

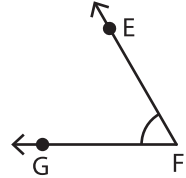
1)



2)

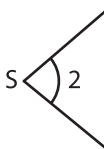


3)

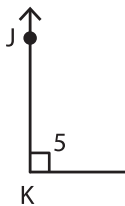


B) Name each angle in two different ways.

4)



6)



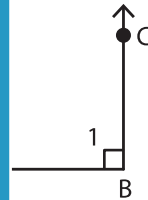
PREVIEW

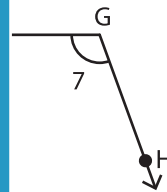
Gain complete access to the largest collection of worksheets in all subjects!

Members, please log in to download this worksheet.

Not a member? Please sign up to gain complete access.

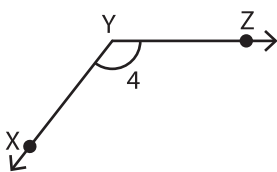
www.mathworksheets4kids.com





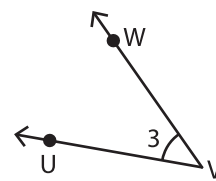
C) Write the missing representation of each angle.

8)



_____ $\cong \angle 4 \cong \angle Y \cong \angle XYZ$

9)



$\angle WVU \cong \angle V \cong \angle UVW \cong$ _____