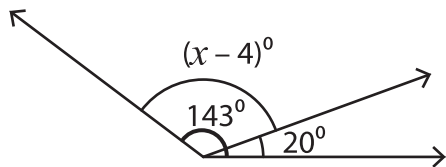


# Pairs of Angles - Find x

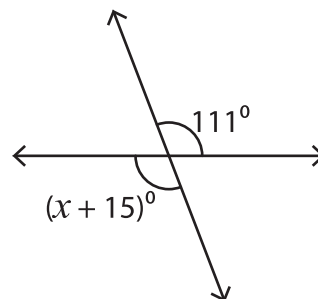
Find the value of  $x$ .

1)



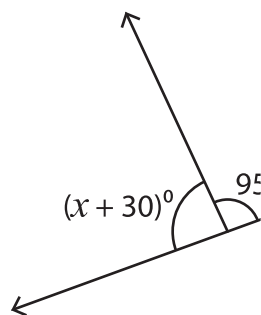
$x =$  \_\_\_\_\_

2)

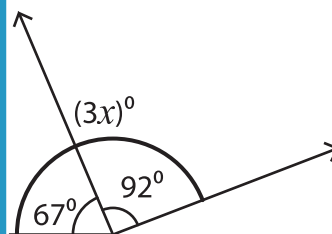


$x =$  \_\_\_\_\_

3)



$x =$  \_\_\_\_\_

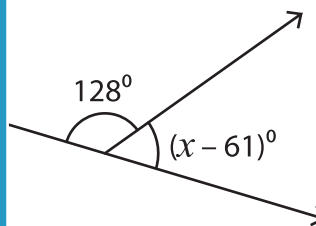


$x =$  \_\_\_\_\_

5)



$x =$  \_\_\_\_\_



$x =$  \_\_\_\_\_

## PREVIEW

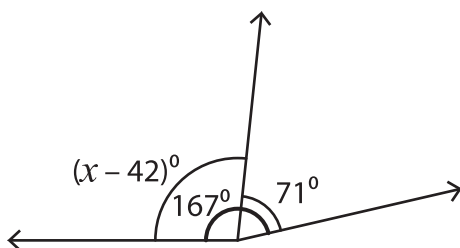
Gain complete access to the largest collection of worksheets in all subjects!

Members, please log in to download this worksheet.

Not a member? Please sign up to gain complete access.

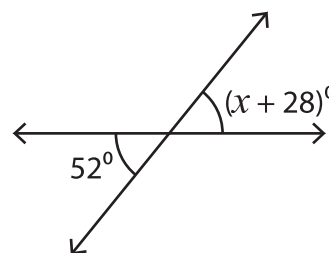
www.mathworksheets4kids.com

7)



$x =$  \_\_\_\_\_

8)



$x =$  \_\_\_\_\_