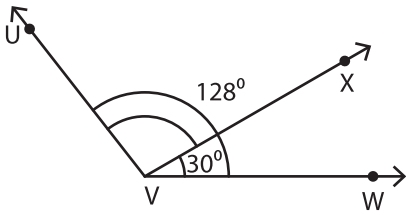


Pairs of Angles

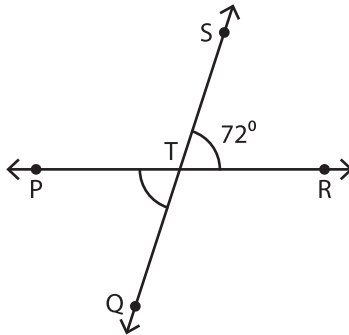
Find the measure of each indicated angle.

1)

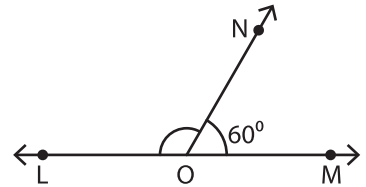


$m\angle UVX =$ _____

2)

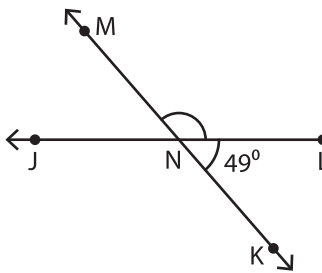


3)



$m\angle LON =$ _____

4)



$m\angle MNL =$ _____

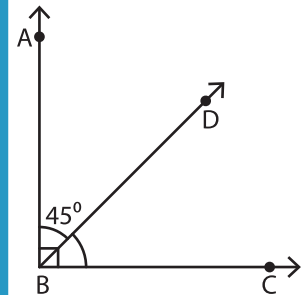
PREVIEW

Gain complete access to the largest collection of worksheets in all subjects!

Members, please log in to download this worksheet.

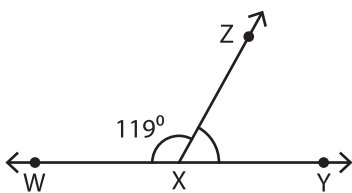
Not a member? Please sign up to gain complete access.

www.mathworksheets4kids.com

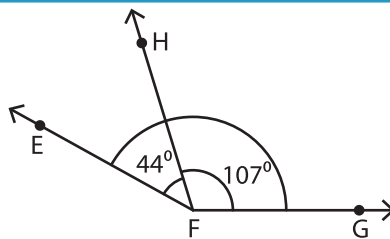


$m\angle DBC =$ _____

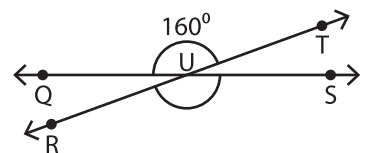
7)



$m\angle YXZ =$ _____



$m\angle EFG =$ _____



$m\angle RUS =$ _____