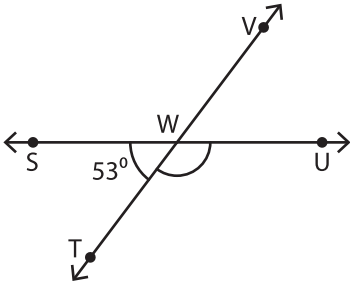


Pairs of Angles

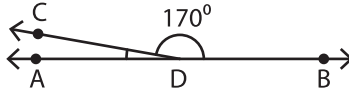
Find the measure of each indicated angle.

1)

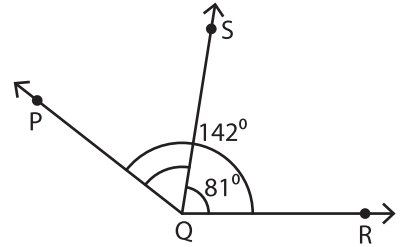


$m\angle UWT =$ _____

2)

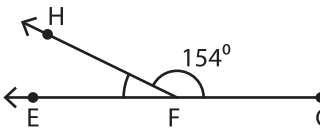


3)



$m\angle PQS =$ _____

4)



$m\angle EFH =$ _____

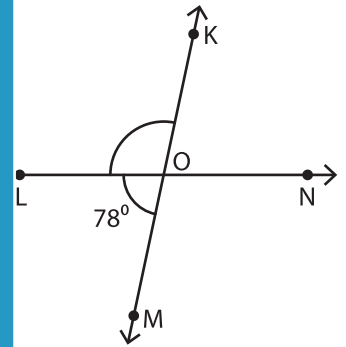
PREVIEW

Gain complete access to the largest collection of worksheets in all subjects!

Members, please log in to download this worksheet.

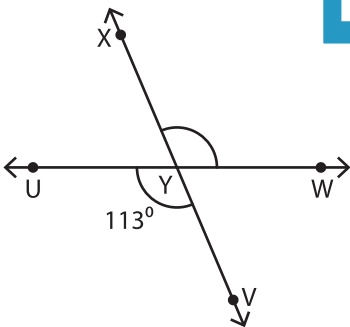
Not a member? Please sign up to gain complete access.

www.mathworksheets4kids.com

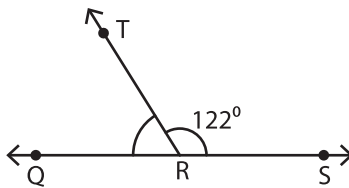


$m\angle LOK =$ _____

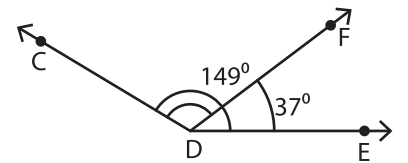
7)



$m\angle XYW =$ _____



$m\angle QRT =$ _____



$m\angle CDF =$ _____